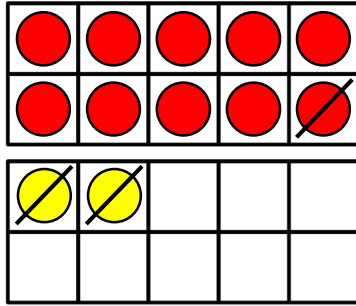
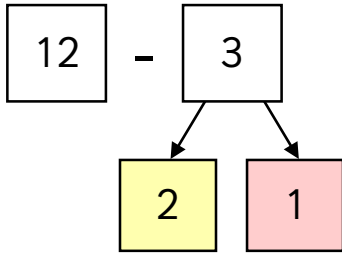


Subtraction – Crossing 10 (1)



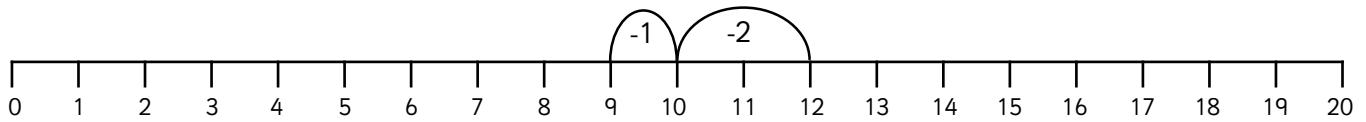
1 Complete the calculations then represent this on the number line.

a

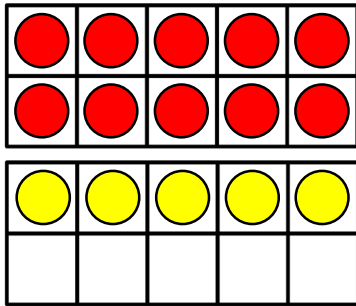
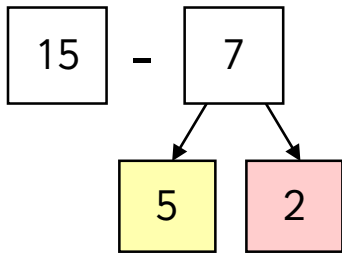


$$\boxed{12} - \boxed{2} = \boxed{10}$$

$$\boxed{10} - \boxed{1} = \boxed{9}$$

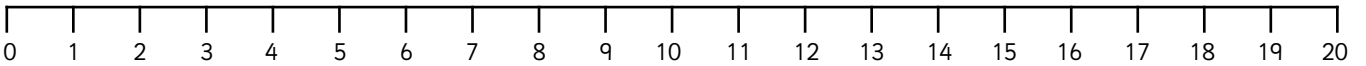


b

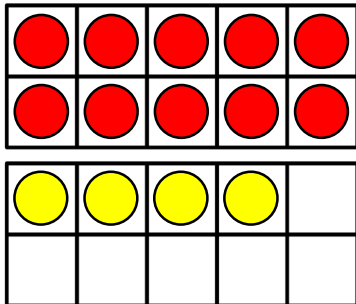
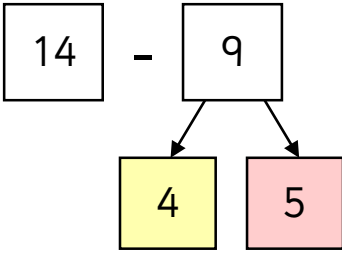


$$\boxed{15} - \boxed{} = \boxed{}$$

$$\boxed{10} - \boxed{2} = \boxed{}$$

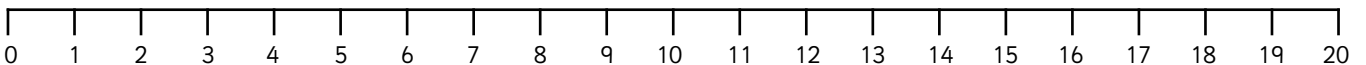


c



$$\boxed{14} - \boxed{} = \boxed{}$$

$$\boxed{10} - \boxed{5} = \boxed{}$$

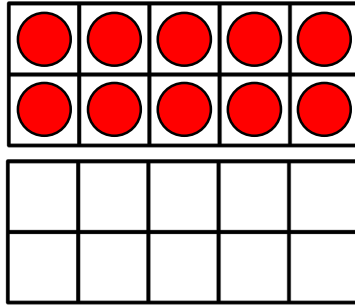
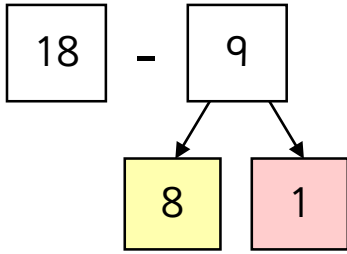


Subtraction – Crossing 10 (1)



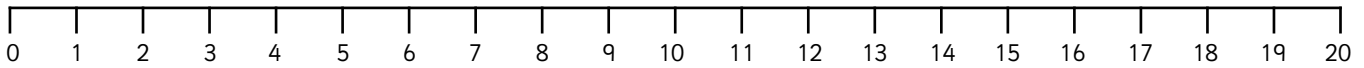
1 Draw the missing counters, complete the calculations then show this on a number line.

a

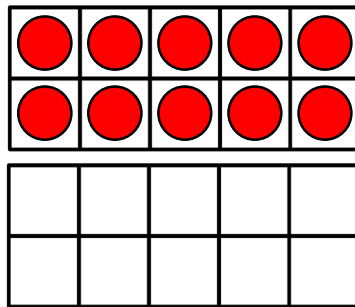
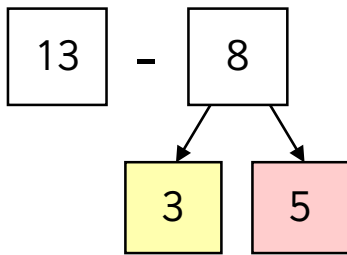


$18 - \square = \square$

$10 - \square = \square$

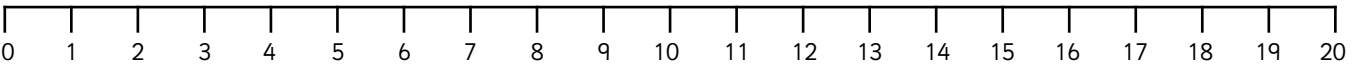


b

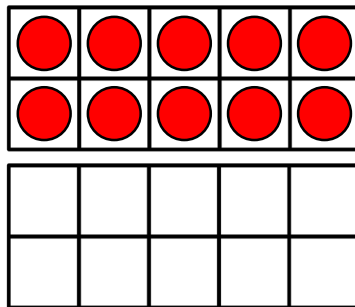
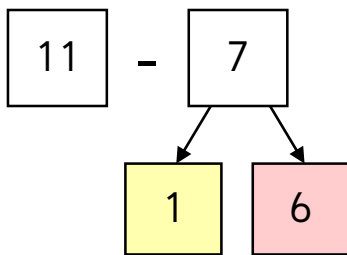


$13 - \square = \square$

$10 - \square = \square$

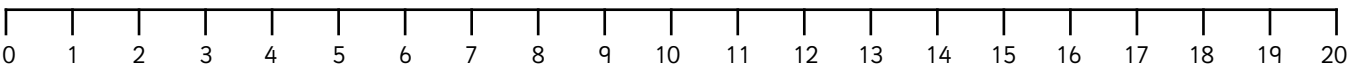


c



$11 - \square = \square$

$10 - \square = \square$



Subtraction – Crossing 10 (1)



1 Draw the missing counters, complete the calculations then show this on a number line.

a

$$\begin{array}{r} \boxed{12} - \boxed{3} \\ \swarrow \quad \searrow \\ \boxed{2} \quad \boxed{1} \end{array}$$

$$\boxed{12} - \boxed{} = \boxed{}$$

$$\boxed{10} - \boxed{} = \boxed{}$$

b

$$\begin{array}{r} \boxed{15} - \boxed{7} \\ \swarrow \quad \searrow \\ \boxed{5} \quad \boxed{} \end{array}$$

$$\boxed{} - \boxed{} = \boxed{}$$

$$\boxed{} - \boxed{} = \boxed{}$$

c

$$\begin{array}{r} \boxed{14} - \boxed{9} \\ \swarrow \quad \searrow \\ \boxed{4} \quad \boxed{} \end{array}$$

$$\boxed{} - \boxed{} = \boxed{}$$

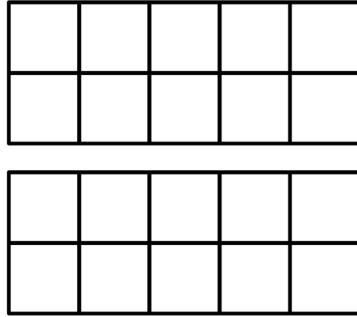
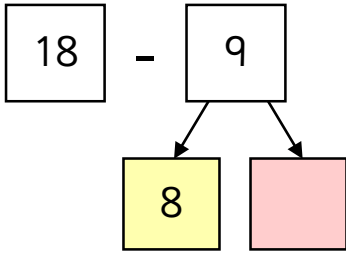
$$\boxed{} - \boxed{} = \boxed{}$$

Subtraction – Crossing 10 (1)



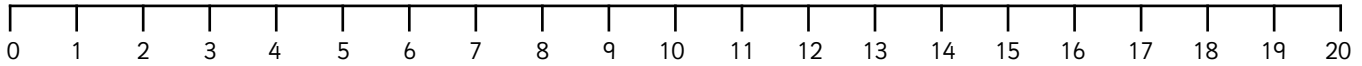
1 Draw counters to complete the calculations then show this on a number line.

a

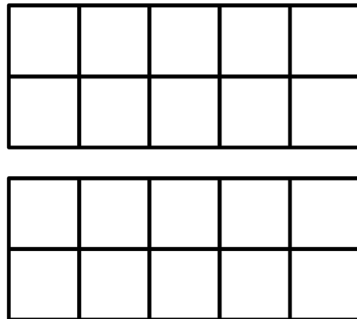
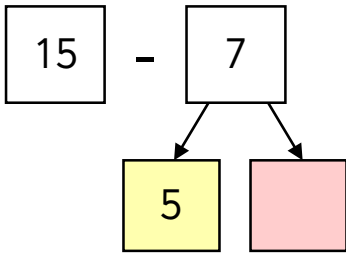


$$\boxed{} - \boxed{} = \boxed{}$$

$$\boxed{} - \boxed{} = \boxed{}$$

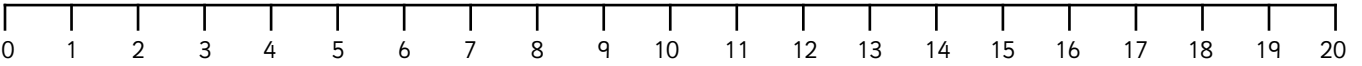


b

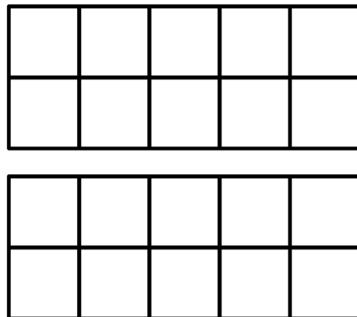
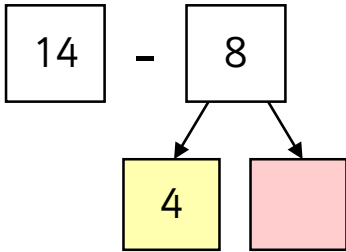


$$\boxed{} - \boxed{} = \boxed{}$$

$$\boxed{} - \boxed{} = \boxed{}$$

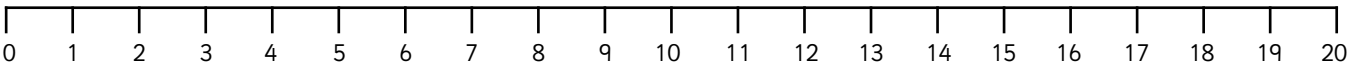


c



$$\boxed{} - \boxed{} = \boxed{}$$

$$\boxed{} - \boxed{} = \boxed{}$$

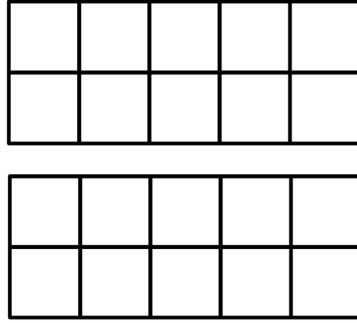
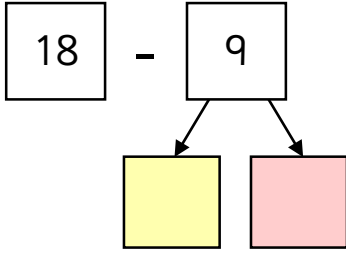


Subtraction – Crossing 10 (1)



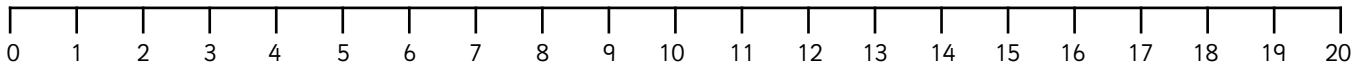
1 Draw counters to complete the calculations then show this on a number line.

a

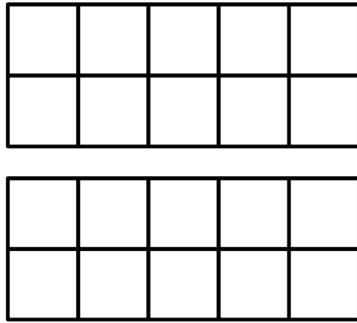
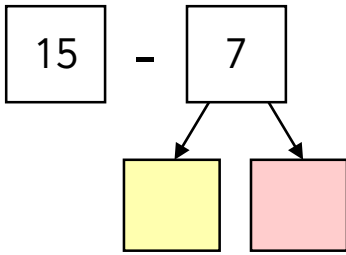


$$\boxed{} - \boxed{} = \boxed{}$$

$$\boxed{} - \boxed{} = \boxed{}$$

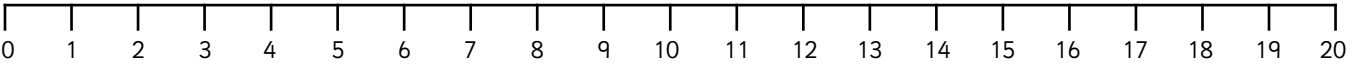


b

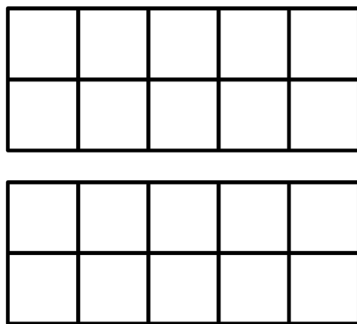
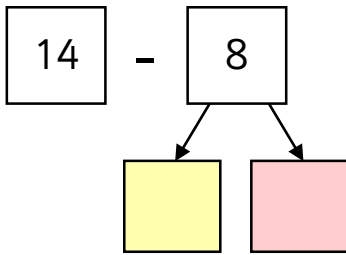


$$\boxed{} - \boxed{} = \boxed{}$$

$$\boxed{} - \boxed{} = \boxed{}$$

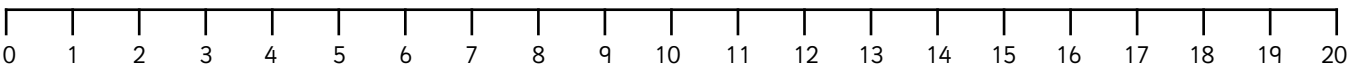


c



$$\boxed{} - \boxed{} = \boxed{}$$

$$\boxed{} - \boxed{} = \boxed{}$$



Answers

To avoid wasting paper & ink,
please do not print this page.

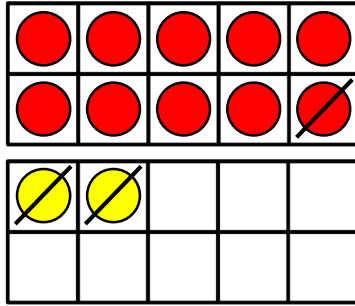
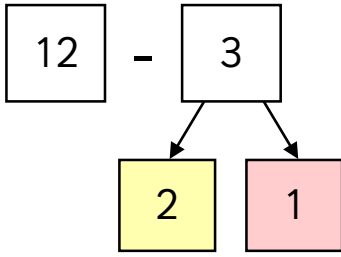


Subtraction – Crossing 10 (1)



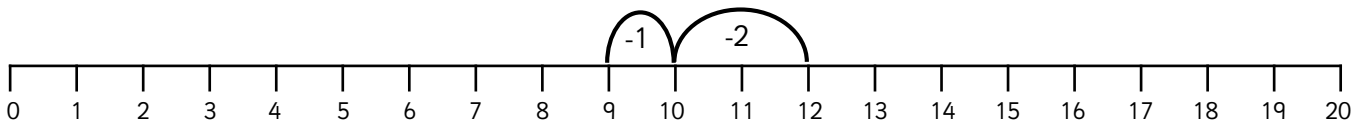
1 Complete the calculations then represent this on the number line.

a

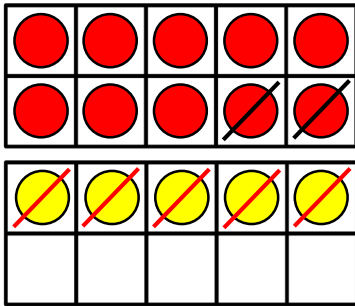
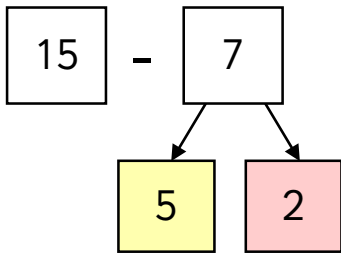


$$\boxed{12} - \boxed{2} = \boxed{10}$$

$$\boxed{10} - \boxed{1} = \boxed{9}$$

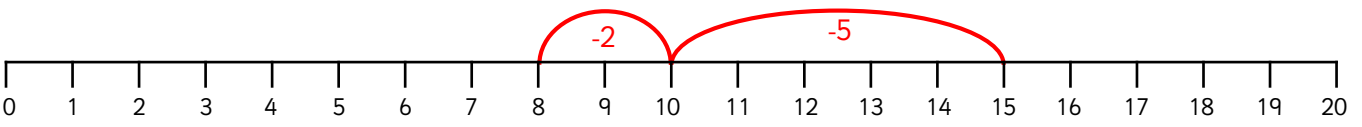


b

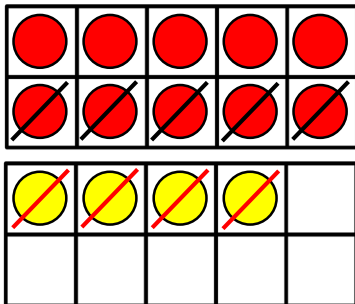
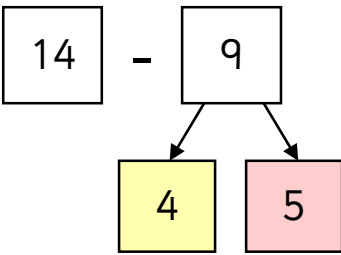


$$\boxed{15} - \boxed{5} = \boxed{10}$$

$$\boxed{10} - \boxed{2} = \boxed{8}$$

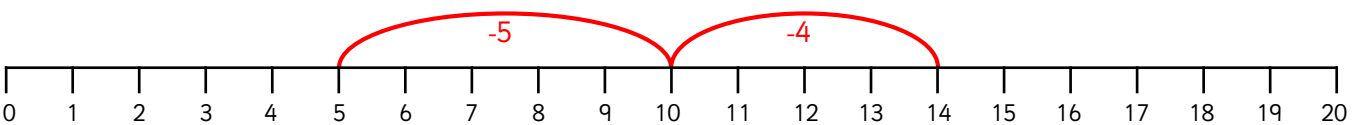


c



$$\boxed{14} - \boxed{4} = \boxed{10}$$

$$\boxed{10} - \boxed{5} = \boxed{5}$$

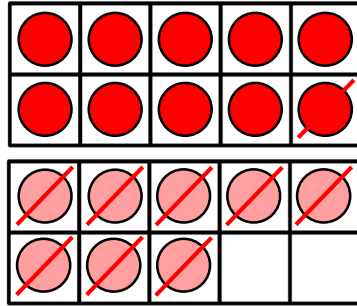
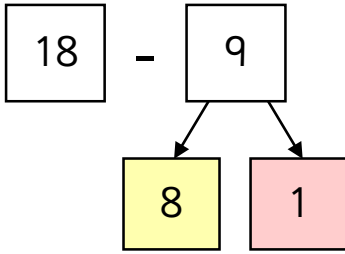


Subtraction – Crossing 10 (1)



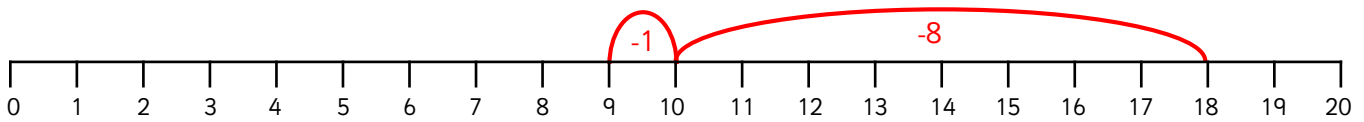
1 Draw the missing counters, complete the calculations then show this on a number line.

a

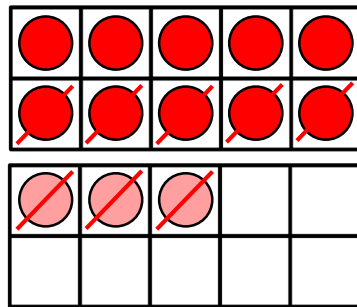
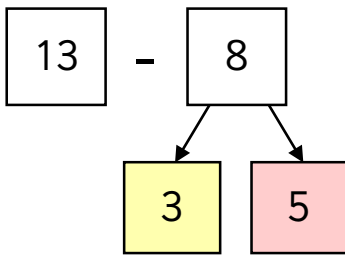


$$18 - 8 = 10$$

$$10 - 1 = 9$$

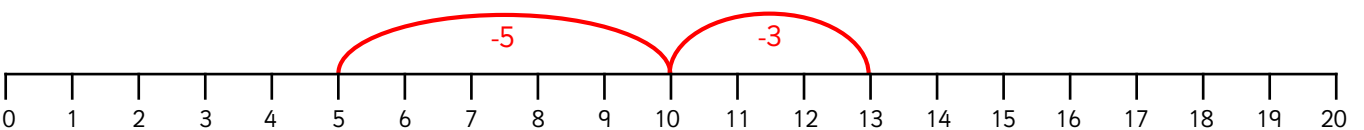


b

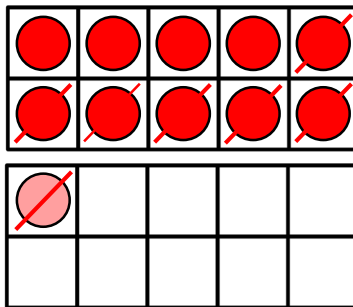
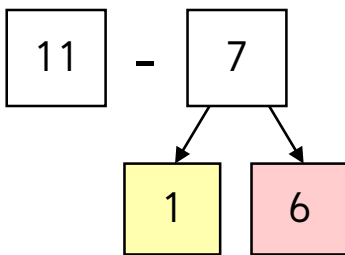


$$13 - 3 = 10$$

$$10 - 5 = 5$$

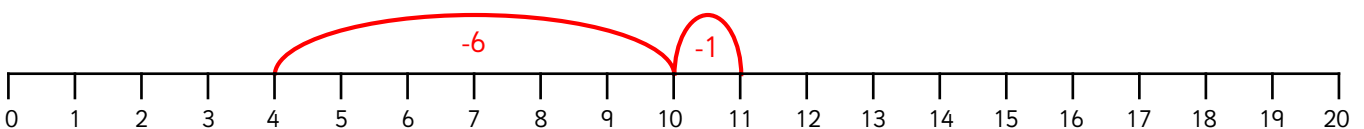


c



$$11 - 1 = 10$$

$$10 - 6 = 4$$



Subtraction – Crossing 10 (1)



1 Draw the missing counters, complete the calculations then show this on a number line.

a

$$\begin{array}{r} 12 \\ - 3 \\ \hline \end{array}$$

$$\begin{array}{r} 2 \\ + 1 \\ \hline \end{array}$$

●	●	●	●	●
●	●	●	●	●
●	●			

●	●			

$$\begin{array}{r} 12 \\ - 2 \\ \hline 10 \end{array}$$

$$\begin{array}{r} 10 \\ - 1 \\ \hline 9 \end{array}$$

b

$$\begin{array}{r} 15 \\ - 7 \\ \hline \end{array}$$

$$\begin{array}{r} 5 \\ + 2 \\ \hline \end{array}$$

●	●	●	●	●
●	●	●	●	●
●	●	●	●	●

●	●	●	●	●
●	●	●	●	●
●	●	●	●	●

$$\begin{array}{r} 15 \\ - 5 \\ \hline 10 \end{array}$$

$$\begin{array}{r} 10 \\ - 2 \\ \hline 8 \end{array}$$

c

$$\begin{array}{r} 14 \\ - 9 \\ \hline \end{array}$$

$$\begin{array}{r} 4 \\ + 5 \\ \hline \end{array}$$

●	●	●	●	●
●	●	●	●	●
●	●	●	●	

●	●	●	●	●
●	●	●	●	●
●	●	●	●	

$$\begin{array}{r} 14 \\ - 4 \\ \hline 10 \end{array}$$

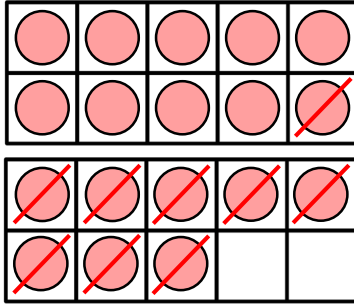
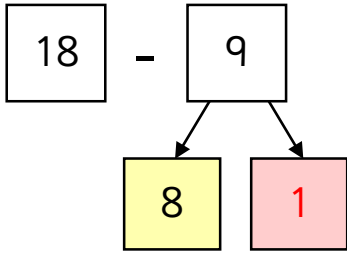
$$\begin{array}{r} 10 \\ - 5 \\ \hline 5 \end{array}$$

Subtraction – Crossing 10 (1)



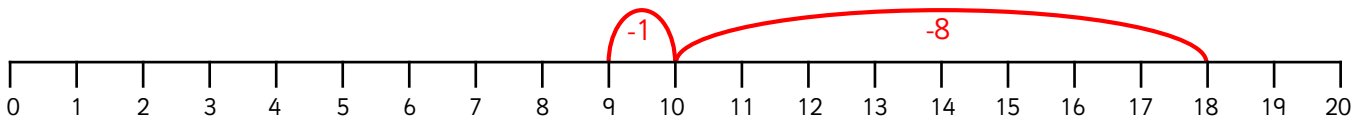
1 Draw counters to complete the calculations then show this on a number line.

a

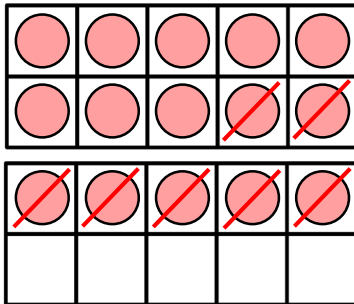
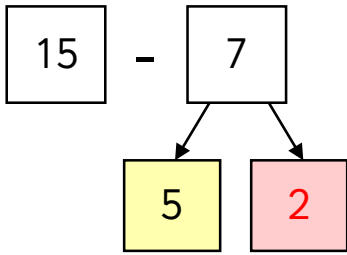


$$18 - 8 = 10$$

$$10 - 1 = 9$$

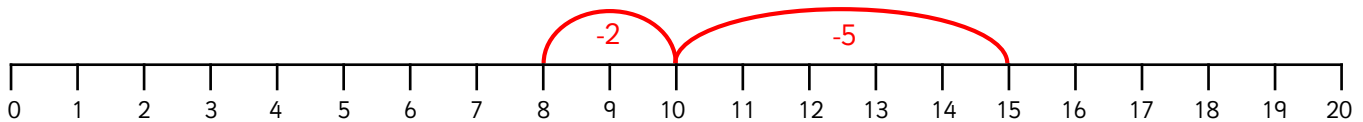


b

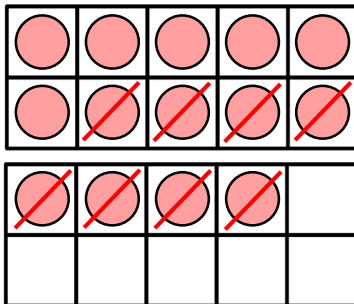
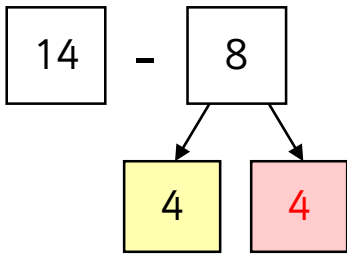


$$15 - 5 = 10$$

$$10 - 2 = 8$$

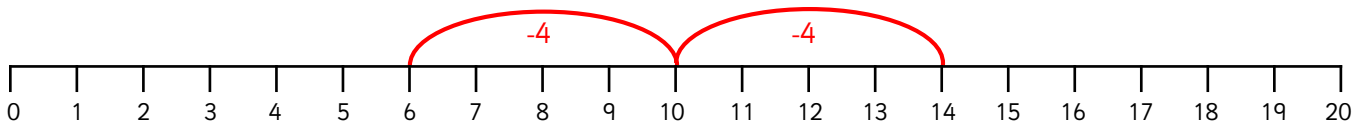


c



$$14 - 4 = 10$$

$$10 - 4 = 6$$

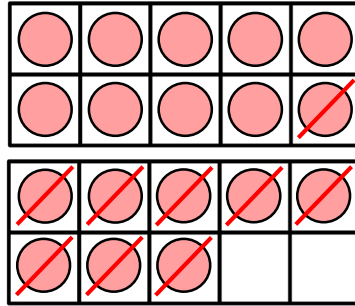
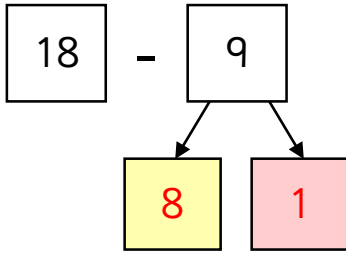


Subtraction – Crossing 10 (1)



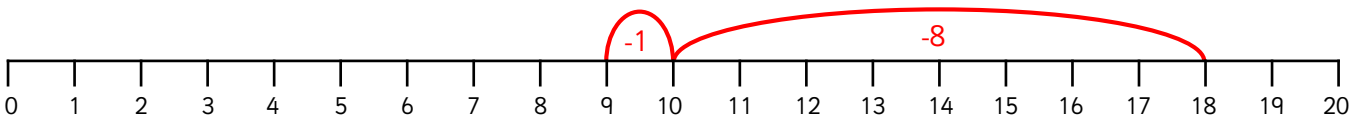
1 Draw counters to complete the calculations then show this on a number line.

a

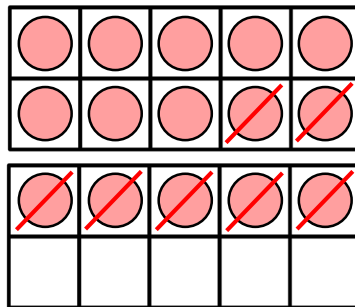
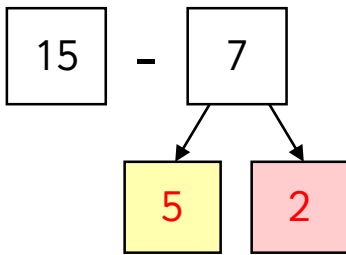


$$\boxed{18} - \boxed{8} = \boxed{10}$$

$$\boxed{10} - \boxed{1} = \boxed{9}$$

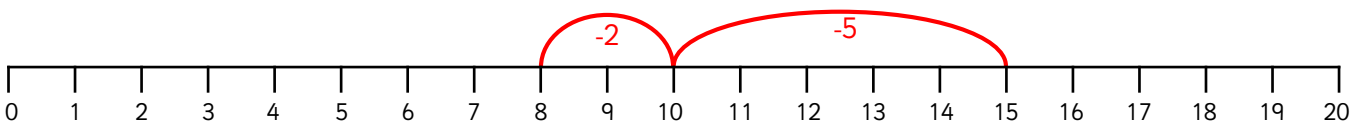


b

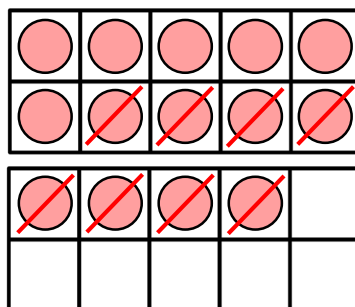
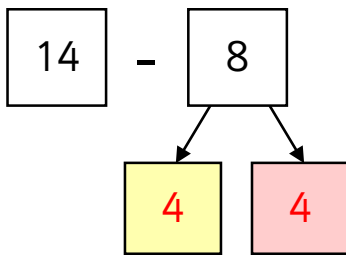


$$\boxed{15} - \boxed{5} = \boxed{10}$$

$$\boxed{10} - \boxed{2} = \boxed{8}$$



c



$$\boxed{14} - \boxed{4} = \boxed{10}$$

$$\boxed{10} - \boxed{4} = \boxed{6}$$

